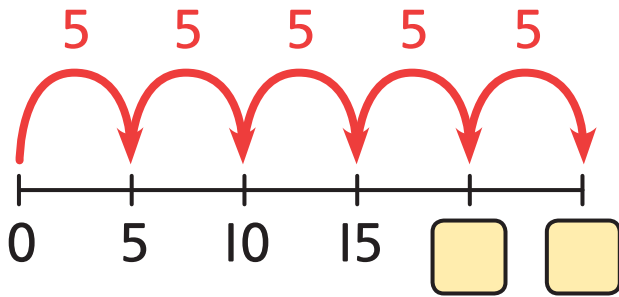



Think together

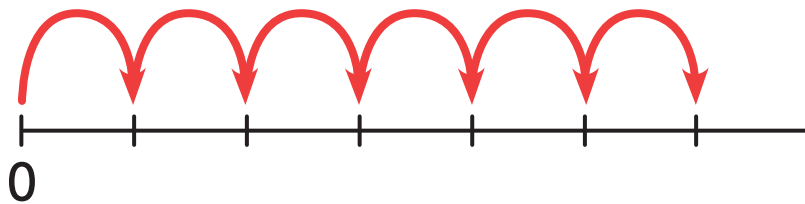
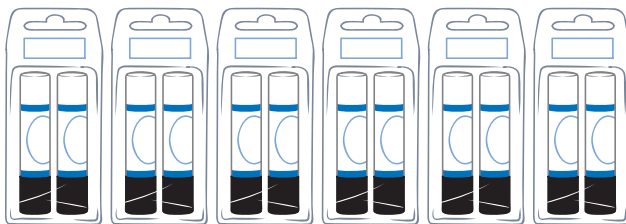
1 How many pencils are there altogether?



1	2	3	4	5	6	7	8	9	10
11	12	13	14	15	16	17	18	19	20
21	22	23	24	25	26	27	28	29	30
31	32	33	34	35	36	37	38	39	40
41	42	43	44	45	46	47	48	49	50

There are pencils altogether.


2 How many glue sticks are there altogether?



There are glue sticks altogether.

CHALLENGE

3 8 packs of pens arrive.



There are 5 pens in each pack.

How many pens are there?

I will start by counting how many packs there are. How many pens are in each pack?



I wonder if I can count in groups to make it quicker to find out how many there are.

