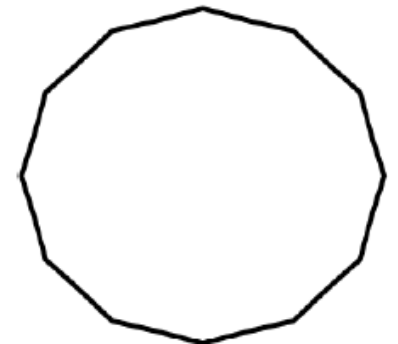
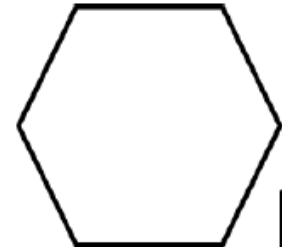
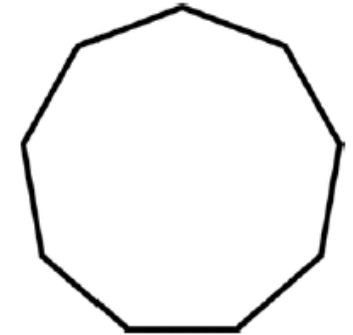
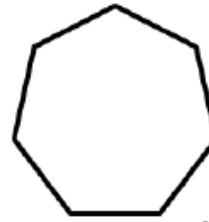
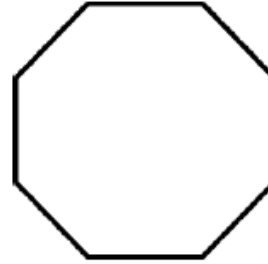
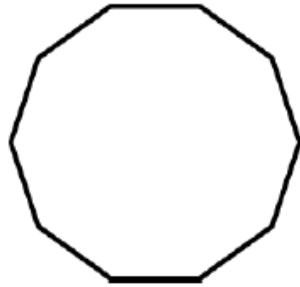
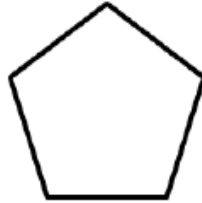
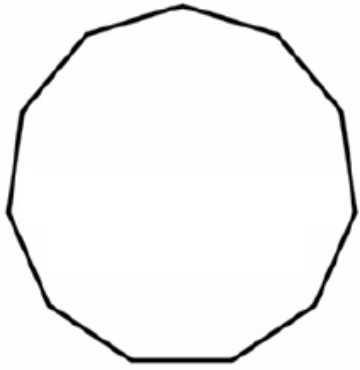


Name _____



Name of Shape	Number of Sides	Number of Triangles	Sum of Interior Angles	Size of Each Interior Angle
<i>Triangle</i>	3	<i>1</i>	<i>180°</i>	<i>60°</i>
<i>Quadrilateral</i>	<i>4</i>	<i>2</i>	<i>360°</i>	<i>90°</i>
	7			
	12			