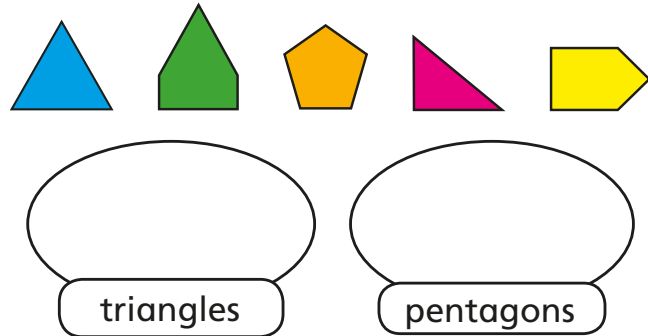
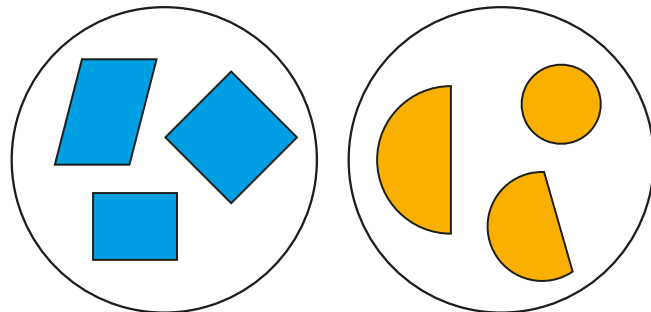


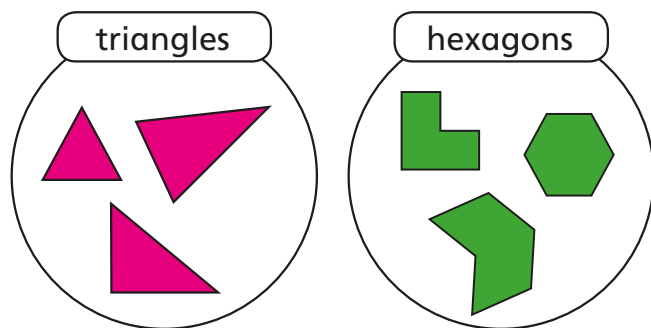
1 Sort the shapes into groups.



2 How have the shapes been sorted?



3 Eva sorts some shapes.

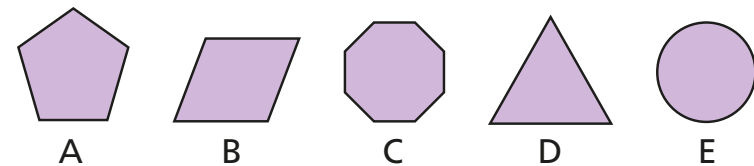


a) Is Eva correct?

How do you know?

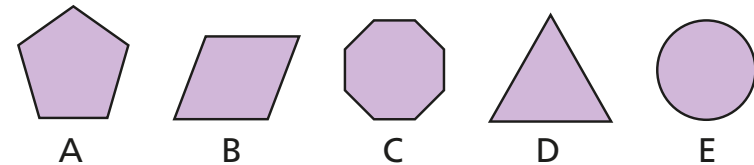
b) Draw a group of three different pentagons.

4 a) Sort the shapes in order of the number of sides. Start with the shape that has the fewest sides.



b) Sort the shapes in order of the number of vertices.

Start with the shape that has the fewest vertices.



c) What do you notice about your answers to part a) and part b)?

5 Draw three different shapes in each group.

shapes with 4 sides

shapes with an odd number of vertices

shapes with an even number of sides

